

3rd Math 2.1a

Name: _____

Class: _____

Date: _____

1. Which shape comes next?



A.



B.



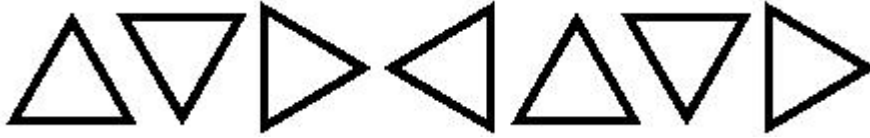
C.



D.



2. Which shape comes next?



A.



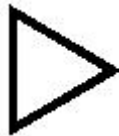
B.



C.



D.



3. Which shape would come next in the pattern?



A.



B.



C.



D.




4. Which shape comes next in the pattern?



A.



B.



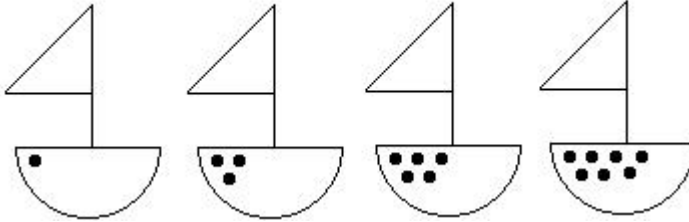
C.



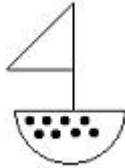
D.



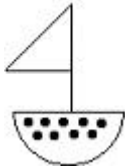
5. What comes next?



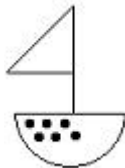
A.



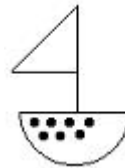
B.



C.



D.



6. Complete the number pattern.

4, 6, 8, 10, _____

- A. 11
- B. 12
- C. 14
- D. 16

7. Complete the number pattern.

5, 8, 11, 14, _____

- A. 16
- B. 15
- C. 17
- D. 19

8. Complete the number pattern.

20, 24, 28, 32, _____

- A. 38
- B. 40
- C. 36
- D. 34

9. Find the missing number in the pattern.

36, 31, 27, 22, 18, _____, 9, 4

- A. 13
- B. 8
- C. 10
- D. 15

10. Find the missing number in the pattern.

82, 69, 58, 49, _____, 37, 34

- A. 41
- B. 40
- C. 43
- D. 42